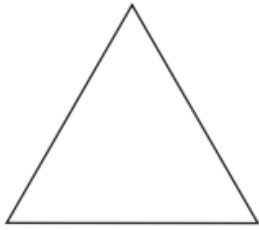



Draw as many lines of symmetry as you can for these shapes.

1.




How many lines of symmetry?

2.



How many lines of symmetry?

3.



How many lines of symmetry?

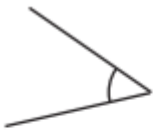
4.



How many lines of symmetry?

Are these angles obtuse, acute or a right angle? How do you know?

1.



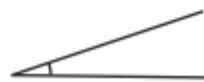
2.



3.



4.



5.



6.